


Pictorial Representation of Multiplication

Pictorial Multiplication

Step 1:



How many spots on the ladybird?

Pictorial Multiplication


Step 2:



How many lots of 2 are there?

Pictorial Multiplication


Step 3:



$$2 + 2 + 2$$

How can we write this down?

Step 4:



$$2 + 2 + 2 = 6$$

How many spots are there altogether?